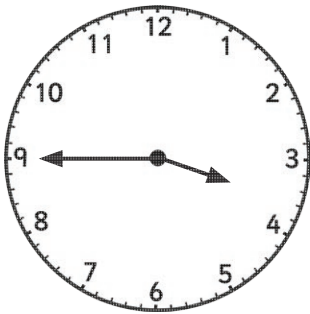


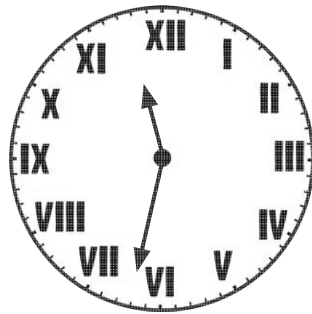
Read, Write and Compare the Time: Before and After

I can read and record time in both 12-hour and 24-hour formats. (ACMMG110)

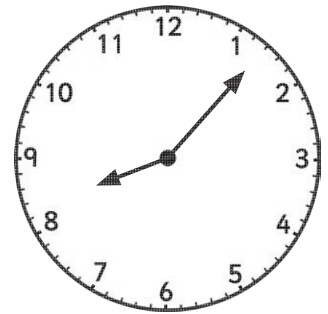
Read the clock and work out the time before or after. Write your answer in 24-hour format.




Twenty minutes
after




One hour and fifty
minutes before




3 hours and
27 minutes after



Ninety minutes
before

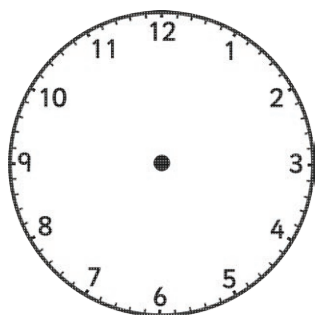


One hour and forty-two
minutes after

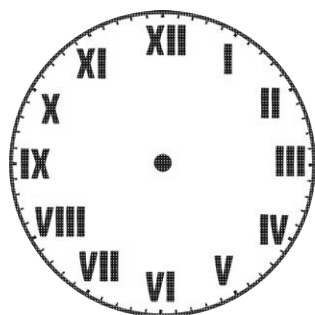


93 minutes
before

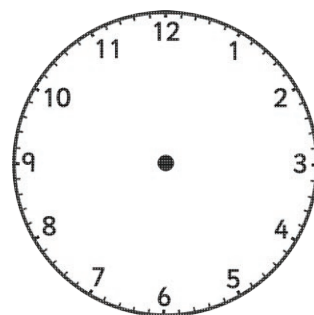
Draw or write the time on the clock.



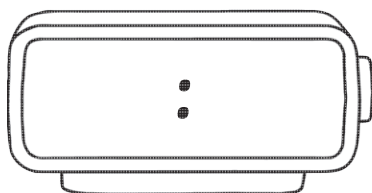
Twenty minutes after
14:52



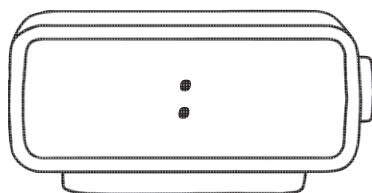
One hour and twenty
minutes before 5:19 a.m.



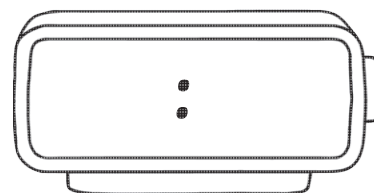
5 hours and 40 minutes
after 19:44



Eighty minutes before
10:15 a.m.



Two hours and forty-six
minutes before 20:04



104 minutes after
22:42


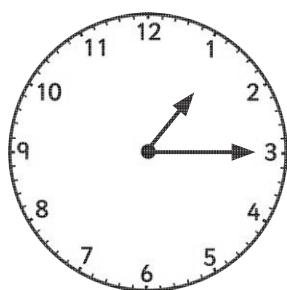
Read, Write and Compare the Time: What's the Difference?

All clocks show the time on the same day unless indicated.

Write the difference between each pair of clocks in:

- a) hours and minutes
- b) minutes alone

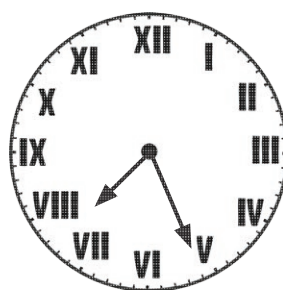
Afternoon



a) _____

b) _____

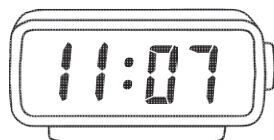
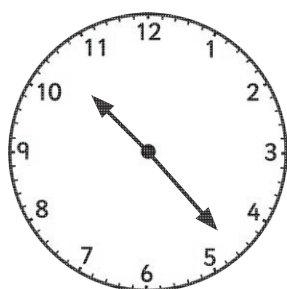
Morning



a) _____

b) _____


Morning



a) _____

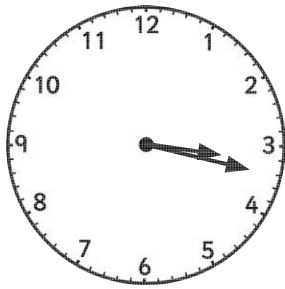
b) _____

Evening



a) _____

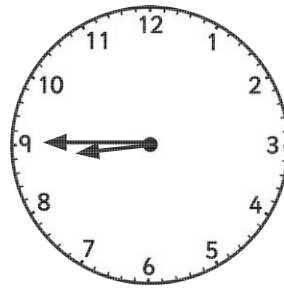
b) _____



Afternoon

a) _____

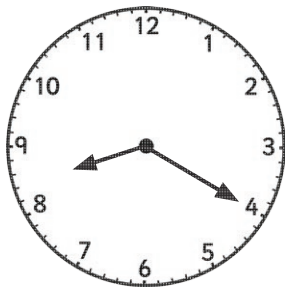
b) _____



Morning

a) _____

b) _____





The next day

Evening

a) _____

b) _____



The previous day

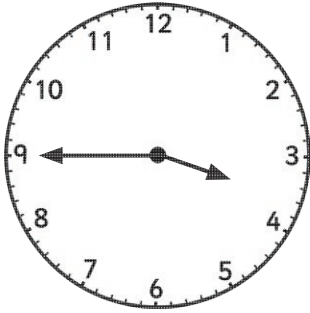
Morning

a) _____

b) _____

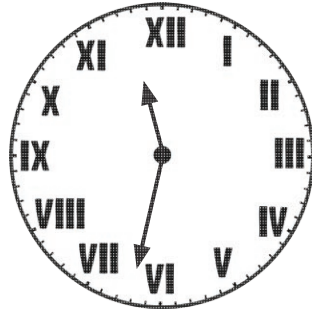
Read, Write and Compare the Time: Before and After Answers

Read the clock and work out the time before or after. Write your answer in 24-hour format.




Twenty minutes
after

04:05 or 16:05



One hour and fifty
minutes before

09:42 or 21:42




3 hours and
27 minutes after

11:34 or 23:34



Ninety minutes
before

00:53



One hour and forty-two
minutes after

18:31

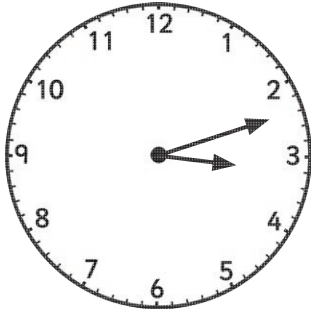


93 minutes
before

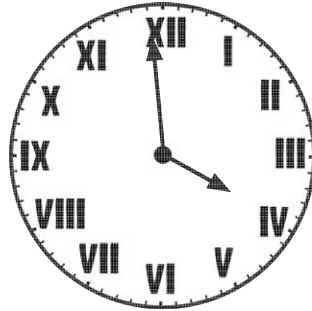
11:33

Read, Write and Compare the Time: Before and After Answers

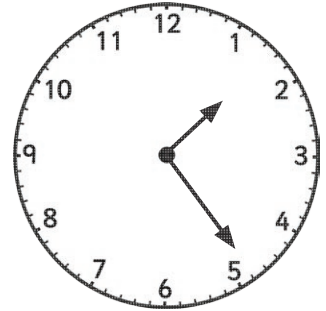
Draw or write the time on the clock.




Twenty minutes after
14:52




One hour and twenty
minutes before 5:19 a.m.




5 hours and 40 minutes
after 19:44



Eighty minutes before
10:15 a.m.



Two hours and forty-six
minutes before 20:04



104 minutes after
22:42

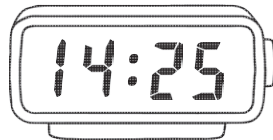
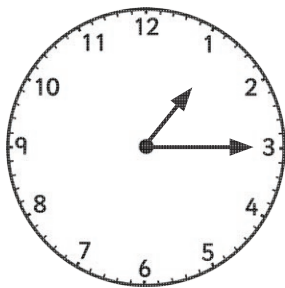
Read, Write and Compare the Time: What's the Difference? Answers

All clocks show the time on the same day unless indicated.

Write the difference between each pair of clocks in:

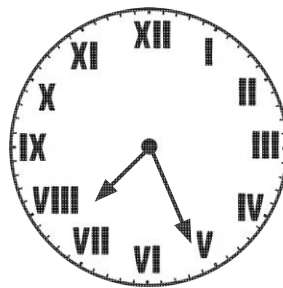
- a) hours and minutes
- b) minutes alone

Afternoon



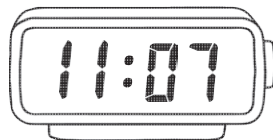
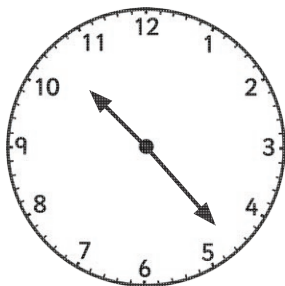
- a) **1 hour 10 minutes**
- b) **70 minutes**

Morning





- a) **2 hours 14 minutes**
- b) **134 minutes**

Morning




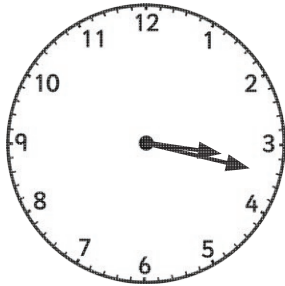
- a) **44 minutes**
- b) **44 minutes**

Evening



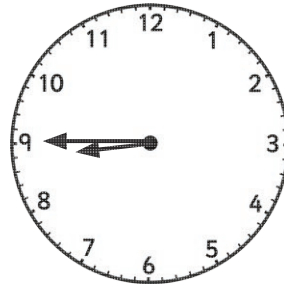
- a) **2 hours 46 minutes**
- b) **166 minutes**

Read, Write and Compare the Time: What's the Difference? Answers



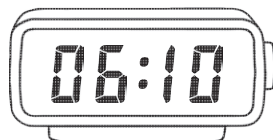
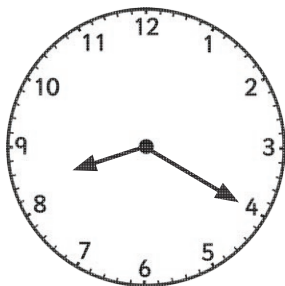
Afternoon

- a) 4 hours 51 minutes
- b) 291 minutes



Morning



- a) 6 hours 25 minutes
- b) 385 minutes



The next day

Evening

- a) 9 hours 50 minutes
- b) 590 minutes



The previous day

Morning

- a) 13 hours 10 minutes
- b) 790 minutes