


1 a) Match the picture to the label.



empty



almost full




almost empty

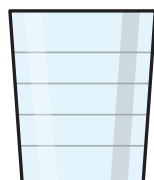


full

b) Show 'almost full' and 'almost empty' another way.



almost full



almost empty

2 Choose a word to complete the sentence.

more

less



A



B

A has \_\_\_\_\_ than B.



A

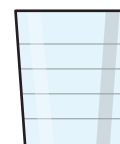


B

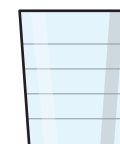
A has \_\_\_\_\_ than B.

3 Show the volume in each glass.

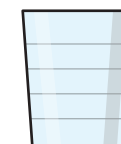
- A is nearly full.
- B is nearly empty.
- A has more than C.
- C has more than B.



A



B



C

Compare answers with a partner.