



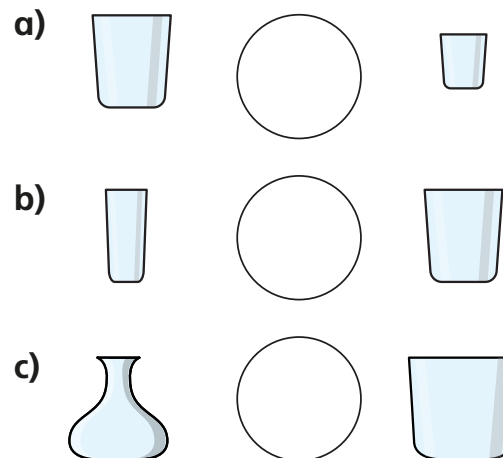


- 1** How many glasses of water will fit in each jug?  
Match the jugs to the glasses.



- 2** Write  $<$ ,  $>$  or  $=$  to compare the capacity of the containers.



- 3** 8 glasses of water fill 1 jug.  
3 jugs of water fill 1 bucket.

Which group of containers holds more water?

